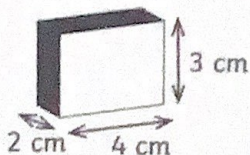


Volume of Rectangular Prisms

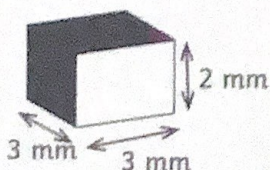
Find the volume of each rectangular prism.

1.



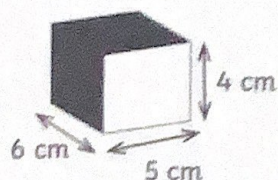
Volume = _____

2.



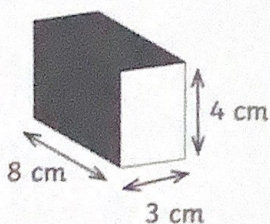
Volume = _____

3.



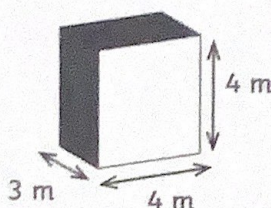
Volume = _____

4.



Volume = _____

5.



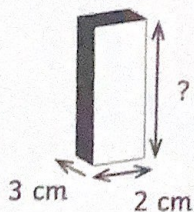
Volume = _____

6.



Volume = _____

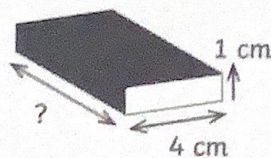
7.



Total volume: 42 cm^3

Height = _____

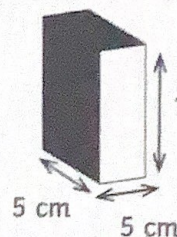
8.



Total volume: 36 cm^3

Length = _____

9.



Total volume: 50 cm^3

Height = _____